

Sub – maths (w)

Class-L.K.G.

M.M. 50

Time : 2:30 hrs

Annual Examination 2025

Name.....

Roll no.....

Date.....

Teacher's Sign.....

Note: All questions are compulsory:

1- Add by counting the things and write in box.

3



$2 + 2 = \underline{\quad}$





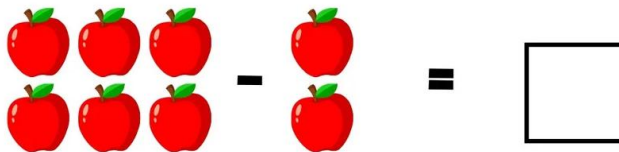
$2 + 3 = \underline{\quad}$



$1 + 2 = \underline{\quad}$

2- Subtraction by crossing out objects

3



3- Write the missing numbers

5

1		3			6				10
---	--	---	--	--	---	--	--	--	----

21		23		25		27		29	
----	--	----	--	----	--	----	--	----	--

4- Write the number name

6

Best of Luck

5- Match the following 2½

Match number with their name

2½



29

Thirteen



34

Eighteen



40

Twenty nine



18

Thirty four



13

Forty

6- Write the number 81 to 100

10

7- Write the table 3 and 4

8

8- Write the number

5

Fifty []

Forty Eight []


Twelve []

Thirty three []

Twenty one []

9- Draw and colour

5



Best of Luck